

READY, SET, GO!	Name _____	Period _____	Date _____
-----------------	------------	--------------	------------

READY

Topic: Distributive Property
Simplify the following expressions

- | | |
|-----------------------------|--------------------------------|
| 1. $3(2x + 7)$ | 2. $-12(5x - 4)$ |
| 3. $5a(-3a + 13)$ | 4. $9x(6x - 2)$ |
| 5. $\frac{2x}{3}(12x + 18)$ | 6. $\frac{4a}{5}(10a - 25b)$ |
| | 7. $\frac{-4x}{11}(121x + 22)$ |

SET

Topic: Recognizing Linear Exponential and Quadratic Equations
In each set of 3 functions, one will be linear and one will be exponential. One of the three will be a new category of function. List the characteristics in each table that helped you to identify the linear and the exponential functions. What are some characteristics of the new function? Find an explicit and recursive equation for each.

8. Linear, exponential, or a new kind of function?

a.

x	$f(x)$
6	64
7	128
8	256
9	512
10	1024

Type and characteristics?

Explicit equation:

Recursive equation:

b.

x	$f(x)$
6	36
7	49
8	64
9	81
10	100

Type and characteristics?

Explicit equation:

Recursive equation:

c.

x	$f(x)$
6	11
7	13
8	15
9	17
10	19

Type and characteristics?

Explicit equation:

Recursive equation:

9. Linear, exponential, or a new kind of function?

d.

x	$f(x)$
-2	-17
-1	-12
0	-7
1	-2
2	3

Type and characteristics?

Explicit equation:

Recursive equation:

e.

x	$f(x)$
-2	$1/25$
-1	$1/5$
0	1
1	5
2	25

Type and characteristics?

Explicit equation:

Recursive equation:

f.

x	$f(x)$
-2	9
-1	6
0	5
1	6
2	9


Type and characteristics?

Explicit equation:


Recursive equation:

10. Graph the functions from the tables in #8 and #9. Add any additional characteristics you notice from the graph. Place your axes so that you can show all 5 points. Identify your scale. Write your explicit equation above the graph.


a. Equation:




b. Equation:




c. Equation:




d. Equation:



e. Equation:



f. Equation:

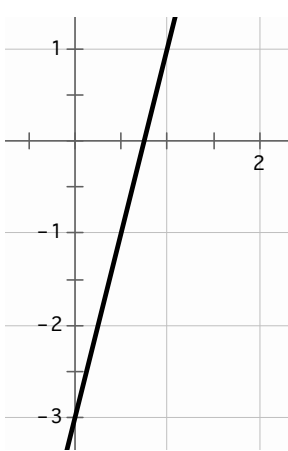


GO

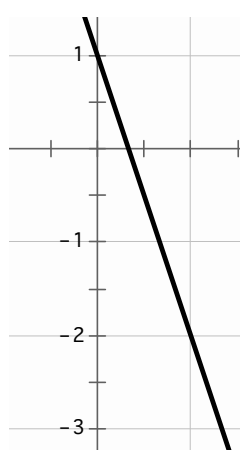
Topic: Rates of Change

Identify the rate of change in each of the representations below.

11.



12.



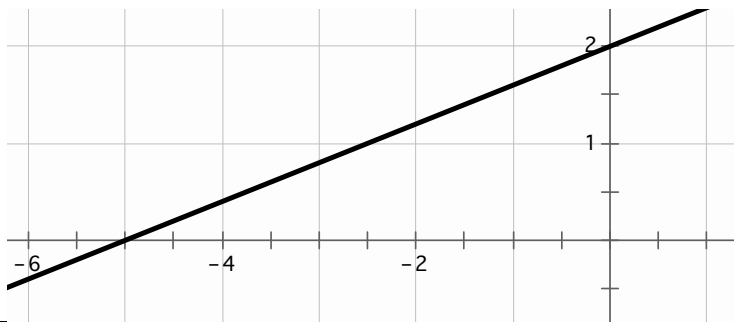
13.

x	f(x)
25	65
26	68
27	71
28	74

14.

$$f(0) = 7; f(n + 1) = f(n) + 5$$

15.



16.

Slope of \overline{AB}
 $A(-3, 12)$ $B(-11, -16)$

17. George is loading freight into an elevator. He notices that the weight limit for the elevator is 1000 lbs. He knows that he weighs 210 lbs. He has loaded 15 boxes into the elevator. Each box weighs 50 lbs. Identify the rate of change for this situation.

18.

Independent variable	4	5	6	7	8
Dependent variable	5	5.5	6	6.5	7

19.

$$f(-4) = 24 \text{ and } f(6) = -36$$