

READY, SET, GO!

Name

Period

Date

READY

Topic: Exploring the density of the number line.

Find **three** numbers that are between the two given numbers.

1. $5\frac{3}{4}$ and $6\frac{1}{3}$

2. $-2\frac{1}{4}$ and $-1\frac{1}{2}$

3. $\frac{1}{4}$ and $\frac{5}{8}$

4. $\sqrt{3}$ and $\sqrt{5}$

5. 4 and $\sqrt{23}$

6. $-9\frac{3}{4}$ and -8.5

7. $\sqrt{\frac{1}{4}}$ and $\sqrt{\frac{4}{9}}$

8. $\sqrt{13}$ and $\sqrt{14}$

SET

Topic: Factoring Quadratics

The area of a rectangle is given in the form of a trinomial expression. Find the equivalent expression that shows the lengths of the two sides of the rectangle.

9. $x^2 + 9x + 8$

10. $x^2 - 6x + 8$

11. $x^2 - 2x - 8$

12. $x^2 + 7x - 8$

13. $x^2 - 11x + 24$

14. $x^2 - 14x + 24$

15. $x^2 - 25x + 24$

16. $x^2 - 10x + 24$

17. $x^2 - 2x - 24$

18. $x^2 - 5x - 24$

19. $x^2 + 5x - 24$

20. $x^2 - 10x + 25$

21. $x^2 - 25$

22. $x^2 - 2x - 15$

23. $x^2 + 10x - 75$

24. $x^2 - 20x + 51$

25. $x^2 + 14x - 32$

26. $x^2 - 1$

27. $x^2 - 2x + 1$


28. $x^2 + 12x - 45$

GO

Topic: Graphing Parabolas


Graph each parabola. Include the vertex and at least 3 accurate points on each side of the axis of symmetry. Then describe the transformation in words.

29. $f(x) = x^2$




Description:

30. $g(x) = x^2 - 3$




Description:

31. $h(x) = (x - 2)^2$



Description:

32. $b(x) = -(x + 1)^2 + 4$



Description: