

Name:

Ready, Set, Go!



© 2012 www.flickr.com/photos/marinacast

Ready

Topic: Solve inequalities, create and solve equations.

Solve the following inequalities for x . Then plot your solution on a number line.

1. $2x - 9 < 3$

2. $4x - 3 < 13$

3. $6x - 4 < 26$

4. $3x - 5 \geq 10$

Create and solve the equations for the following problems.

- Virginia's Painting Service charges \$10 per job and \$0.20 per square foot. If Virginia earns \$50 for painting one job, how many square feet did she paint at the job?
- Renting the ice-skating rink for Dayne's birthday party costs \$200 plus \$4 per person. If the cost was \$324, how many people were at Dayne's birthday party?

Set

Topic: Solve inequalities

Solve each inequality. Write the solution as an inequality.

7. $x + 15 < 12$

8. $x - 4 \geq 13$

9. $9x > -\frac{3}{4}$

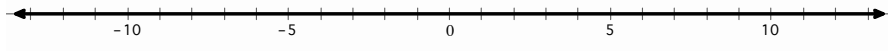
10. $3x - 7 \geq 3(x - 7)$

11. $x - 12 \geq 80$

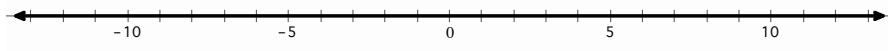


Solve each inequality and graph the solution on the number line.

12. $x - 2 \leq 1$

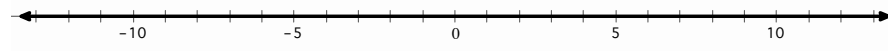


13. $x - 8 > -20$

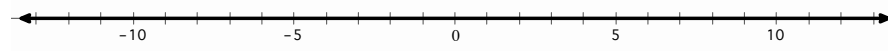


Solve each inequality. Write the solution as an inequality and graph it.

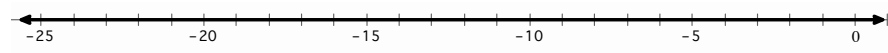
14. $3x \leq 6$



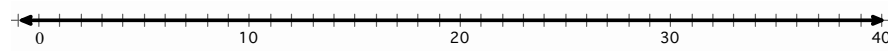
15. $\frac{x}{5} > -\frac{3}{10}$



16. $-10x > 150$



17. $\frac{x}{7} \geq -5$



Solve each multi-step inequality.

18. $x - 5 > 2x + 3$

19. $\frac{3(x-4)}{12} \leq \frac{2x}{3}$

20. $2(x - 3) \leq 3x - 2$

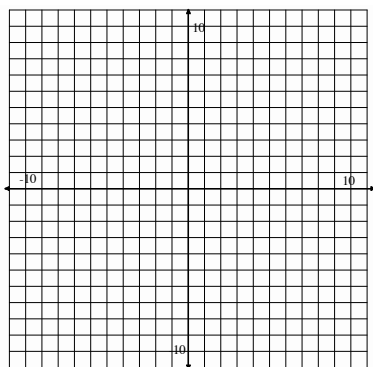


Go

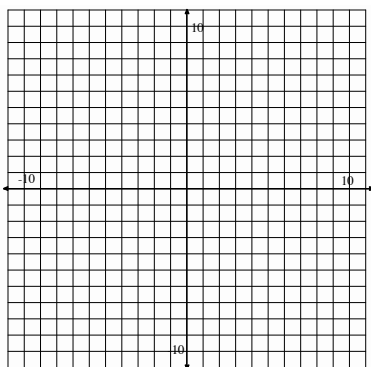
Topic: Solve systems of linear equations

Solve linear equations and pairs of simultaneous linear equations (simple, with a graph only). Justify the solution numerically.

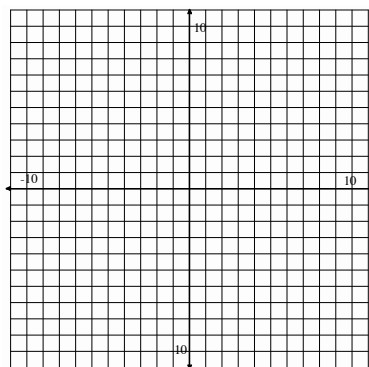
21.
$$\begin{cases} y = -x + 5 \\ -x + y = 1 \end{cases}$$



22.
$$\begin{cases} x + 2y = 8 \\ 5x + 2y = 0 \end{cases}$$



23.
$$\begin{cases} 3x + 2y = 12 \\ 4x - y = 5 \end{cases}$$



Need Help? Check out these related videos:

<http://www.khanacademy.org/math/algebra/solving-linear-inequalities/v/equations-and-inequalities><http://www.khanacademy.org/math/algebra/solving-linear-equations/v/solving-for-a-variable><http://www.khanacademy.org/math/algebra/systems-of-eq-and-ineq/v/solving-linear-systems-by-graphing>