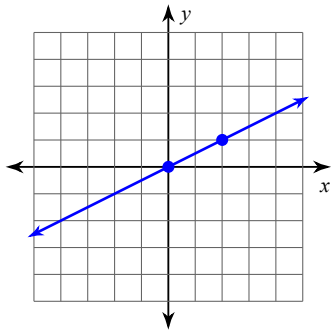


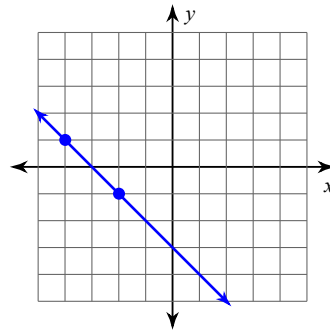
# Finding Slope From a Graph

**Find the slope of each line.**

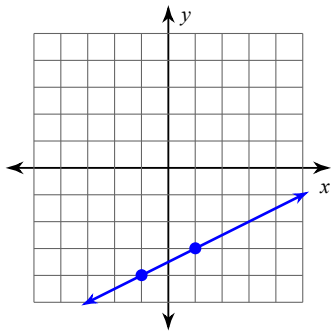
1)



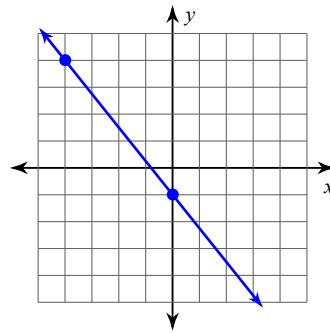
2)



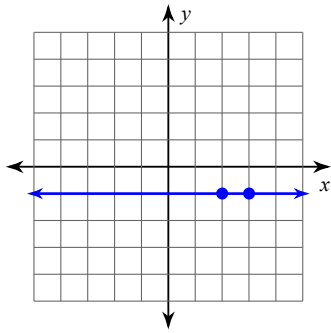
3)



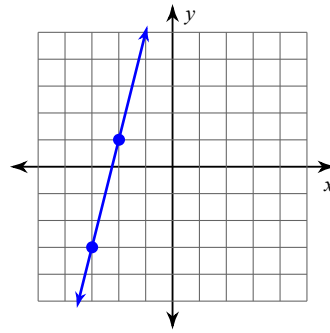
4)



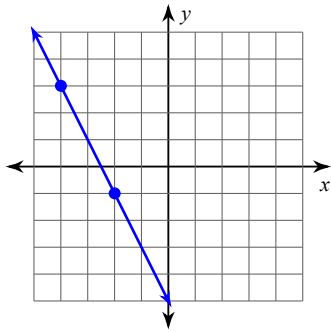
5)



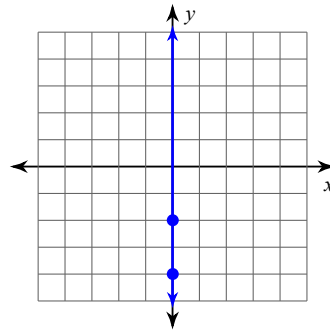
6)



7)



8)



9)  $(6, -10), (-15, 15)$

10)  $(12, -18), (-15, -18)$

11)  $(3, -20), (5, 8)$

12)  $(15, 8), (-17, 9)$

13)  $(-19, 12), (-9, 1)$

14)  $(12, 2), (-7, 5)$

15)  $(6, -12), (15, -3)$

16)  $(9, 3), (19, -17)$