


4.4 Reflections of a Bike Lover

A Practice Understanding Task




© 2013 <http://flic.kr/p/71K2MR>

1. Graph the function $f(x) = x^2 - 4$
2. Graph $g(x) = |f(x)|$ on the same set of axes as $f(x)$.
3. Explain what happens graphically.
4. Write the piecewise function for $g(x)$.
5. Explain your process for creating this piecewise function.



6. Graph the function $f(x) = (x + 1)^2 - 9$
7. Graph $g(x) = |f(x)|$.
8. Explain what happens graphically?
9. Write the piece-wise function for $g(x)$.




10. What do you have to think about when writing any absolute value piece-wise function?



Graph the following absolute value functions and write the corresponding piecewise functions for each.


11. $g(x) = |x^2 - 4| + 1$

Piecewise:



12. $g(x) = |(x + 2)^2 - 4| + 3$

Piecewise:



13. $g(x) = |(x - 3)^2 - 1| - 2$

Piecewise:

