

Ready, Set, Go!**Ready**

© 2012 www.flickr.com/photos/teddylambec

Topic: Writing equations of lines.

Write the equation of a line in slope-intercept form: $y = mx + b$, using the given information.

1. $m = -7, b = 4$

2. $m = 3/8, b = -3$

3. $m = 16, b = -1/5$

Write the equation of the line in point-slope form: $y - y_1 = m(x - x_1)$, using the given information.

4. $m = 9, (0, -7)$

5. $m = 2/3, (-6, 1)$

6. $m = -5, (4, 11)$

7. $(2, -5) (-3, 10)$

8. $(0, -9) (3, 0)$

9. $(-4, 8) (3, 1)$




Set

Topic: Graphing linear and exponential functions

Make a graph of the function based on the following information. Add your axes. Choose an appropriate scale and label your graph. Then write the equation of the function.

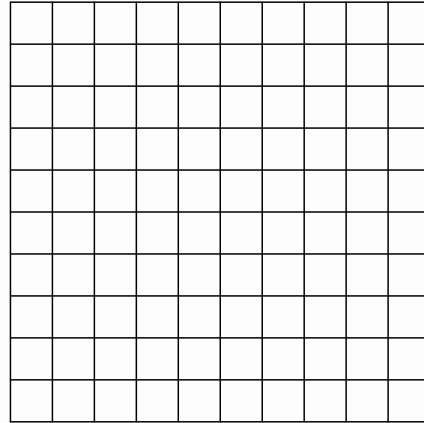
10. The beginning value of the function is 5 and its value is 3 units smaller at each stage.

Equation:




11. The beginning value is 16 and its value is $\frac{1}{4}$ smaller at each stage.

Equation:




12. The beginning value is 1 and its value is 10 times as big at each stage.

Equation:



13. The beginning value is -8 and its value is 2 units larger at each stage.

Equation:



Go

Topic: Slope-Intercept Form

Rewrite the equations in slope-intercept form.

14. $2y + 10 = 6x + 12$

15. $5x + y = 7x + 4$

16. $(y - 13) = \frac{1}{2}(8x - 14)$

17. $(y + 11) = -7(x - 2)$

18. $(y - 5) = 3(x + 2)$

19. $3(2x - y) = 9x + 12$

20. $y - 2 = \frac{1}{5}(10x - 25)$

21. $y + 13 = -1(x + 3)$

22. $y + 1 = \frac{3}{4}(x + 3)$

Need Help? Check out these related videos:

Equations in slope-intercept form:

<http://www.khanacademy.org/math/algebra/linear-equations-and-inequalitie/v/linear-equations-in-slope-intercept-form>

Equations in point-slope form:

<http://www.khanacademy.org/math/algebra/linear-equations-and-inequalitie/v/linear-equations-in-point-slope-form>

© 2012 Mathematics Vision Project| MVP

In partnership with the Utah State Office of Education

Licensed under the Creative Commons Attribution-NonCommercial-ShareAlike 3.0 Unported license.

