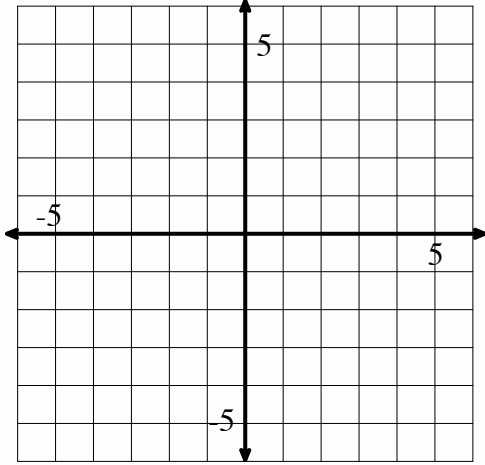


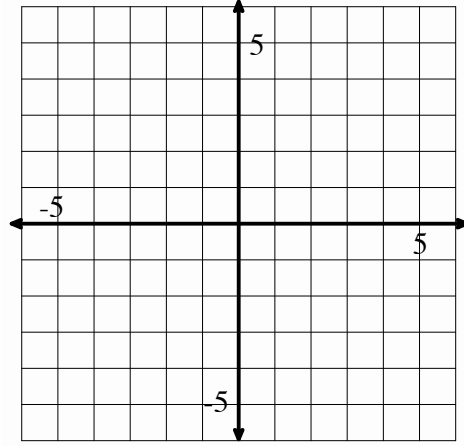
## Warm Up 8

Graph the following equations

1.  $y = -3x + 2$

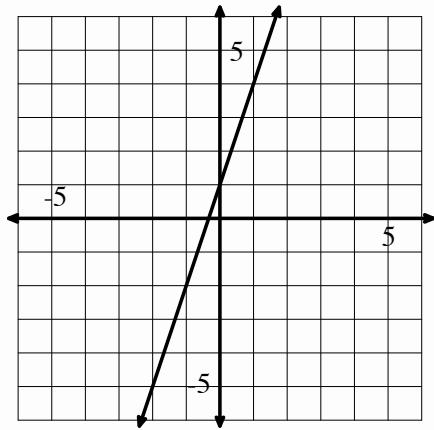


2.  $y = -\frac{3}{2}x - 1$

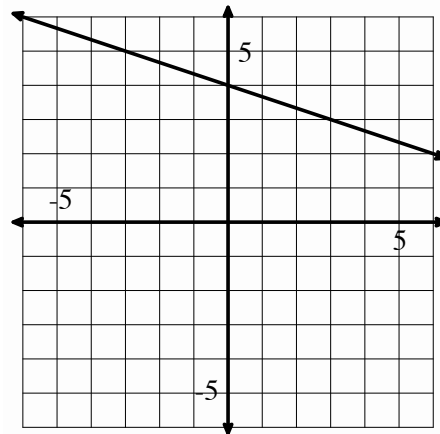


Write an equation for the following graphs

3.  $y =$



4.  $y =$



5. Simplify the following expression

$$\frac{25a - 10}{5} + 3(4a - 2)$$

6. Solve the following equation

$$\frac{25a - 10}{5} + 3(4a - 2) = 26$$